



Express each number using tally marks.

1) 16 \_\_\_\_\_

2) 21 \_\_\_\_\_

3) 89 \_\_\_\_\_

4) 70 \_\_\_\_\_

5) 61 \_\_\_\_\_

6) 72 \_\_\_\_\_

7) 58 \_\_\_\_\_

8) 44 \_\_\_\_\_

9) 55 \_\_\_\_\_

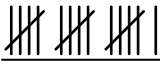


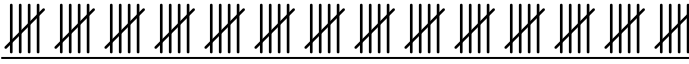


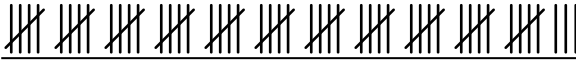



10) 94 \_\_\_\_\_

11) 62 \_\_\_\_\_

12) 95 \_\_\_\_\_



Express each number using tally marks.

1) 16 2) 21 3) 89 4) 70 5) 61 6) 72 7) 58 8) 44 9) 55 10) 94 11) 62 12) 95 